

Hangar 3,4,5 Trail

H3

Find the display of squadron badges
They are near to the flying boat

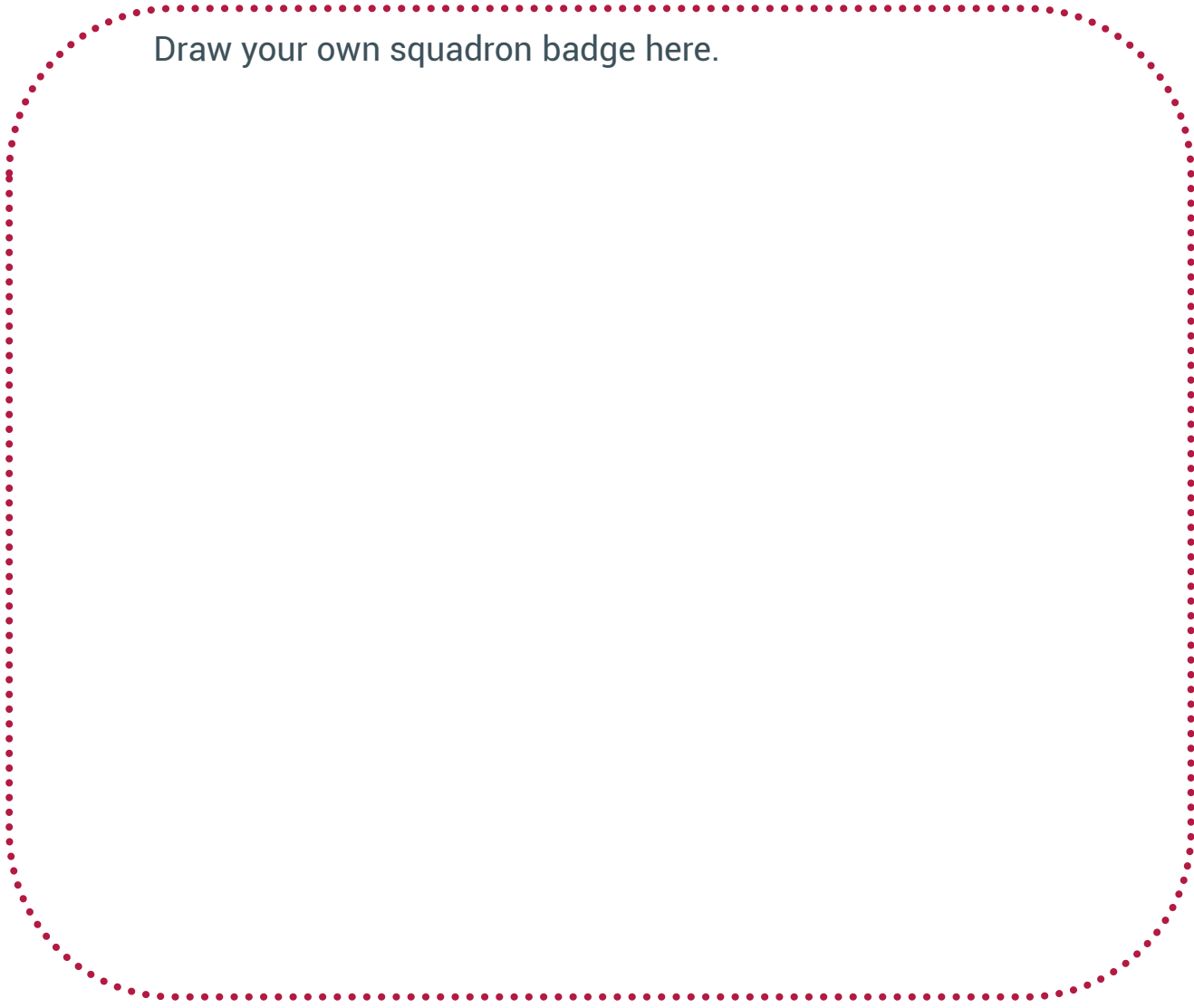


Choose your two favourite badges and find the number of the squadrons on them.

Write the numbers here

What's the difference between these numbers?

Draw your own squadron badge here.

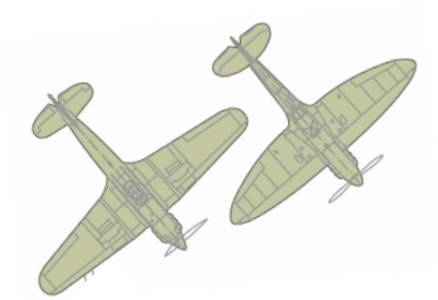


H3

Find the Battle of Britain Fighter Aircraft

They are near to the big Lancaster aeroplane.

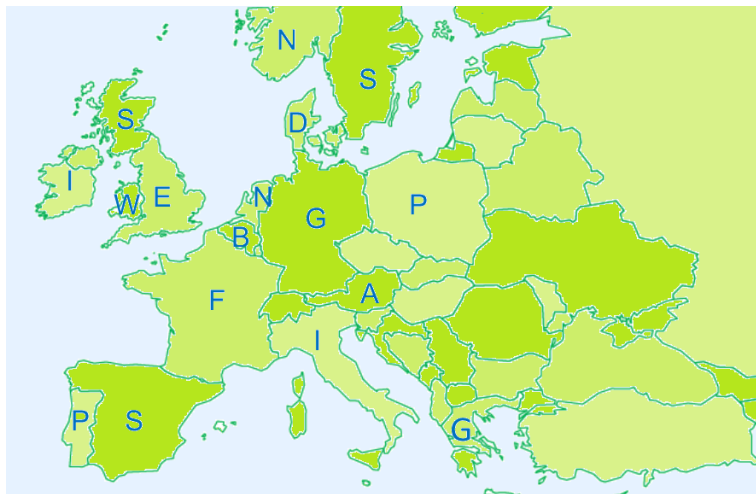
H4



Which plane is the odd one out?

Why? (look at the wings)

What country is it from?



Find the country on the map (hint – it looks a bit like a boot kicking a ball).

During the Battle of Britain, this aircraft fought **against** the RAF with one of the other aeroplanes.

Which one?

Find the Lancaster Bomber

To help them get to their target, aircrew would often navigate by following **man-made** features on the ground such as roads or railway lines.


Look at the map below. Once they reached Germany, what **natural** feature could the aircrew follow to Hamburg?



The Lancaster needed a crew of seven people who each had a particular job to do. They wore a badge on their uniforms to show which job they did. Can you match the right badge to the right job?



Navigator



Pilot



Air Gunner




Engineer


Find the P-51D Mustang

The Mustang is an American aircraft from the Second World War and it is the shiniest plane at the Museum.

To show which country it is from, it has a roundel (badge) painted on the side.



What shape is missing from the circle above?



Draw the reflection to complete the shape.

What colours are in the roundels painted on British aircraft?

